



KENDRIYA VIDYALAYA SANGATHAN REGIONAL OFFICE JAIPUR
SAMPLE PAPER SESSION ENDING EXAM -2025-26

SUBJECT- MATHEMATICS Class: (III)

Section: _____

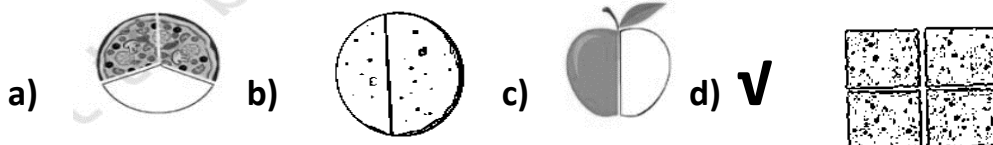
ANSWER KEY

KNOWLEDGE (10)

VSA

Answer the following.

Q.1 Tick (✓) the object that show quarter: (1)



Tick the correct answer . (1)

Q.2): Which vessel will hold the least water.

a) Glass b) Bowl c) Bottle d) ☒ Cup

SA

Q.3 Fill in the blanks

(2)

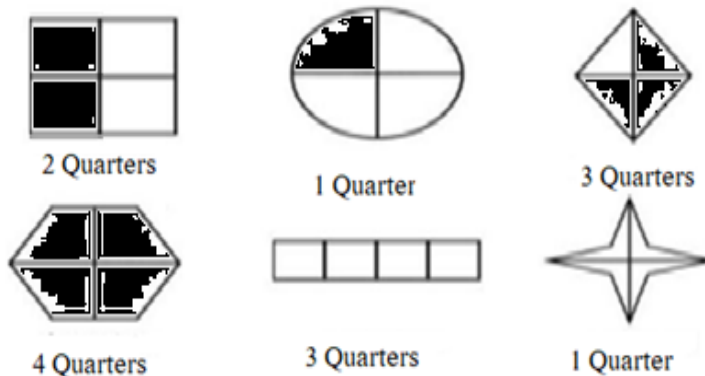
1) $364 + 52 = 416$ 2) $356 - 138 = 218$

Q.4 Locate the following numbers on the number line : 815, 715, 795, 755 .



LA

Q.5 Colour the shapes below to show the fractions as instructed. (any four) (4)



UNDERSTANDING (10)

VSA

1. Circle the greatest 3 Digit Number is:

(1)

(A) 99

(B) 099

(C) 100

(D) 999

2. The Place value of 4 in the number 25647:

(1)

(A) 400

(B) 4,000

(C) 4

(D) 40

SA

3. Hetal started her breakfast at 7 o'clock in the morning. She finished her breakfast at 07:15 in the morning.

(a) 07:00



(b) 07:15



She took 15 Minutes to eat her breakfast.

4. Draw and complete the symmetrical Rangoli given below



LA

5. Match the following such that all the conditions are met.

(4)

I have 2 zeroes as digits and am very close to 99

I have 3 hundreds, 6 tens and 7 ones

I have zero tens and zero ones

I am century + half century

I come between 400 and 450 and I have 5 as a digit

150

425

367

400

100

Ability to compute (10)

Convert according to:

Q.1 3 kg = 3000 gram . (1)

Q.2 9 rupees = 900 paise. (1)

SA

Q3 Write the total amounts of money shown by the notes. (2)



Rupees. 21

Q.4 Do as directed. (2)

| | | | | | |
|-------------------|------------|------------|------------|------------|------------|
| Add 6 | 234 | 240 | 246 | 252 | 258 |
| Subtract 6 | 357 | 351 | 345 | 339 | 333 |

LA

Q.4 Look at the given number grid and fill in the blanks. (4)

| | | | | |
|------------|------------|------------|------------|------------|
| 321 | 322 | 323 | 324 | 325 |
| 326 | 327 | 328 | 329 | 330 |
| 331 | 332 | 333 | 334 | 335 |
| 336 | 337 | 338 | 339 | 340 |

- a. 321 is the smallest number.**
- b. 333 is a repeating digit number.**
- c. Numbers having 0 at ones place are 330 and 340 .**
- d. Write any two numbers having 3 at tens place are 331 and 332 .**

PROBLEM SOLVING ABILITY (10)

VSA

Q.1 Write the name of 2 objects whose length is less than one metre ? (1)

Pencil and Scale

Q.2 Write the names of 2 objects that are less than 1 kilogram. (1)

Lunch box and Book

SA

Q.3) Peter uncle saved rupees 250 in the first month, rupees 125 in the second month and rupees 350 in the third month. How much has he saved in these three months?(2)

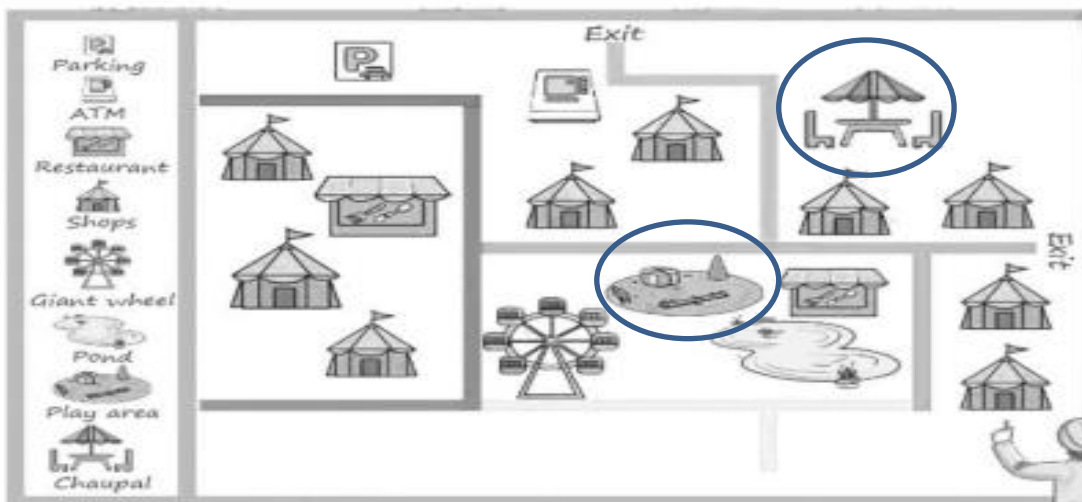
$$250 + 125 + 350 = 725$$

Q.4) Mohan has a collection of 309 saplings. He gets 80 more saplings of flowering plants. How many saplings does he have now? (2)

$$309 + 80 = 389$$

LA

Q.5 Read the map and find the answer for the following questions. (4)



a.Circle the picture in the map that shows the play area?

b. Circle the picture in the map that shows Chaupal?

c. Which place does the P sign show? Parking

d. How many exit routes are there in the fair? 2 (two) .