



KENDRIYA VIDYALAYA SANGATHAN REGIONAL OFFICE JAIPUR
SAMPLE PAPER SESSION ENDING EXAM -2025-26

SUBJECT- MATHEMATICS Class: (III)

Section: _____

Name: _____ Roll No. _____ Date: /__ /__

DURATION:-1 H. 30 Min.

MAX. MARK: 40

COMPETENCIES	BASIC CONCEPT (20)		ABILITY TO COMPUTE.	PROBLEM SOLVING ABILITY	TOTAL MARKS
	a) KNOWLEDGE	b) UNDERSTANDING			
MARKS.	(10)	(10)	(10)	(10)	(40)
VALUE POINTS	Marks	Marks	Marks	Marks	Marks
OBTAINED MARKS					

Signature of Invigilator - _____

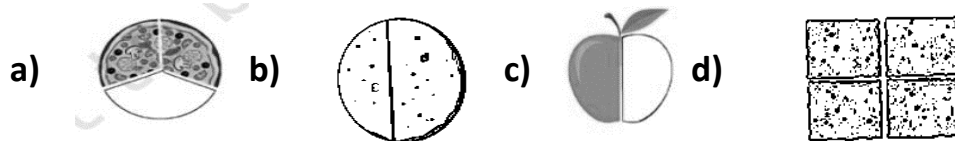
Signature of Examiner - _____

KNOWLEDGE (10)

VSA

Answer the following.

Q.1 Tick (v) the object that show quarter: (1)



Tick the correct quantity of measuring . (1)

Q.2): Which vessel will hold the least water.

a) Glass b) Bowl c) Bottle d) Cup


SA

Q.3 Fill in the blanks

(2)

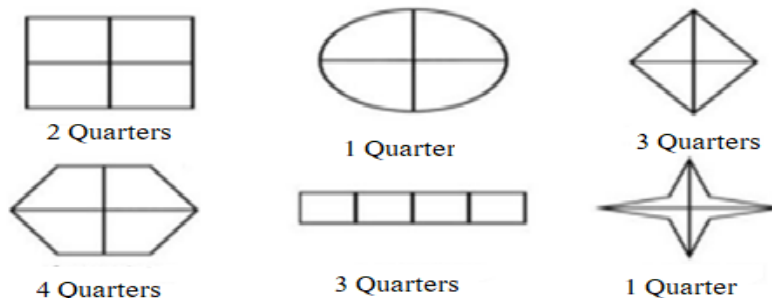
1) $364+52 = \dots\dots\dots$ 2) $356-138 = \dots\dots\dots$

Q.4 Locate the following numbers on the number line : 815, 715, 795, 755 .



LA

Q.5 Colour the shapes below to show the fractions as instructed. (any four) (4)



UNDERSTANDING (10)

VSA

1. Circle the greatest 3 Digit Number is: (1)

- (A) 99 (B) 099 (C) 100 (D) 999

2. The Place value of 4 in the number 25647: (1)

- (A) 400 (B) 4,000 (C) 4 (D) 40

SA

3. Hetal started her breakfast at 7 o'clock in the morning. She finished her breakfast at 07:15 in the morning.

(a) 07:00

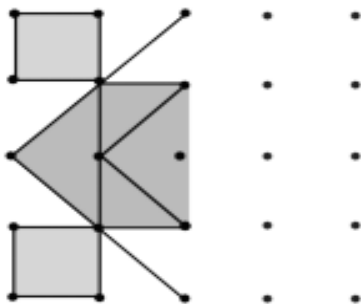


(b) 07:15



She took Minutes to eat her breakfast.

4. Draw and complete the symmetrical Rangoli given below.



LA

5. Match the following such that all the conditions are met. (4)

I have 2 zeroes as digits and am very close to 99

I have 3 hundreds, 6 tens and 7 ones

I have zero tens and zero ones

I am century + half century

I come between 400 and 450 and I have 5 as a digit

150

425

367

400

100

ABILITY TO COMPUTE (10)

VSA

Convert according to:

Q.1 3 kg = _____ gram . (1)

Q.2 9 rupees = _____ paise. (1)

SA

Q3 Write the total amounts of money shown by the notes. (2)



Rupees. _____

Q.4 Do as directed. (2)

Add 6	234				
Subtract 6	357				

LA

Q.4 Look at the given number grid and fill in the blanks. (4)

321	322	323	324	325
326	327	328	329	330
331	332	333	334	335
336	337	338	339	340

- a. _____ is the smallest number.
- b. _____ is a repeating digit number.
- c. Numbers having 0 at ones place are _____.
- d. Write any two numbers having 3 at tens place are _____.

PROBLEM SOLVING ABILITY (10)

VSA

Q.1 Write the name of 2 objects whose length is less than one metre ? (1)

Q.2 Write the names of 2 objects that are less than 1 kilogram. (1)

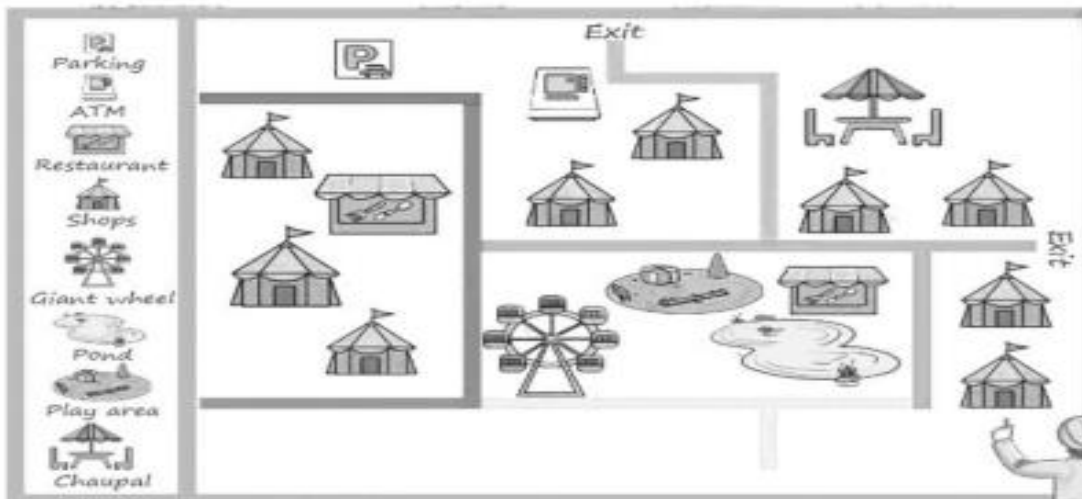
SA

Q.3) Peter uncle saved rupees 250 in the first month, rupees 125 in the second month and rupees 350 in the third month. How much has he saved in these three months?(2)

Q.4) Mohan has a collection of 309 saplings. He gets 80 more saplings of flowering plants. How many saplings does he have now? (2)

LA

Q.5 Read the map and find the answer for the following questions. (4)



- a. Circle the picture in the map that shows the play area?
- b. Circle the picture in the map that shows Chaupal?
- c. Which place does the P sign show?
- d. How many exit routes are there in the fair?.....