

KENDRIYA VIDYALAYA SANGATHAN JAIPUR REGION

SESSION ENDING EXAM 2025-26

CLASS- V

Maximum Marks: 40

SUBJECT- TWAU

Time: 90 Minutes

PM SHRI / Kendriya Vidyalaya

Name..... sec.... Roll no..... Date.....


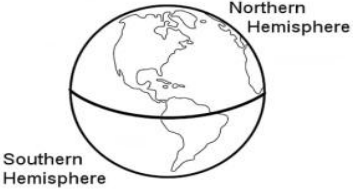
Curricular Goals/Competencies	CG-1	CG-2	CG-3	CG-4	CG-5	Total
Value Points	10	8	6	10	6	40
Marks awarded						

Invigilator.....

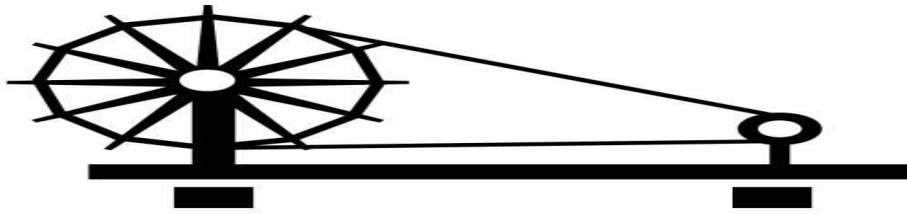
Evaluator.....

- **Instructions:**

- 1. Read all questions carefully.
- 2. All questions are compulsory.
- 3. All questions are provided with the marks allotted to each question.

Ques No.	Questions	Marks
	CG.1 Explores and engages with the natural and socio - cultural environment in their surroundings.	
1.	Which bird is known for weaving complex hanging nests from grass? a) Crow b) Baya Weaver c) Tailorbird d) Woodpecker 	1
2.	The imaginary line that divides the Earth into the Northern and Southern Hemispheres is the: a) Axis b) Prime Meridian c) Equator d) Orbit 	1

3.



Observe the "Charkha." Who made the Charkha a symbol of self-reliance in India, and what was its primary use?

$$1 + 1 = 2$$

4.

Classify the following into 'Stored Energy' or 'Energy in Action':

- (i) A battery inside a toy car: _____
- (ii) A ball rolling down a hill: _____
- (iii) Food inside our body: _____
- (iv) A stretched rubber band: _____

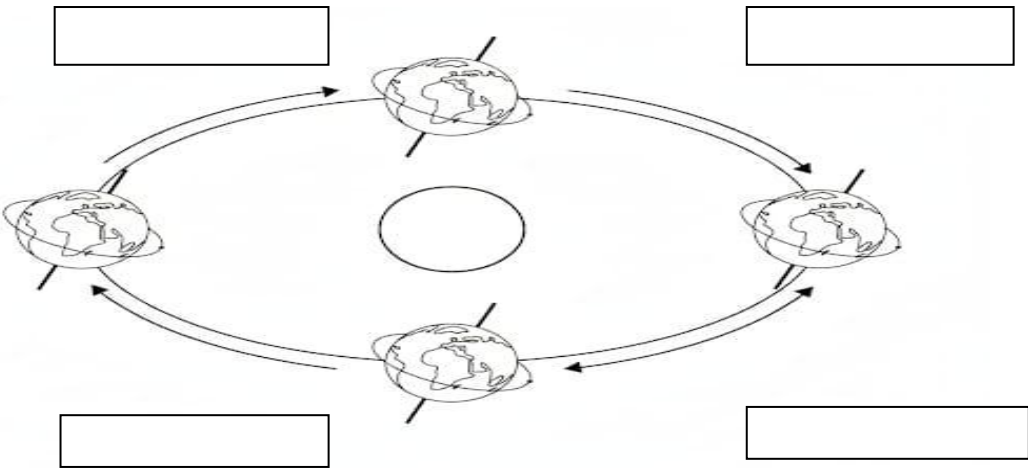
2

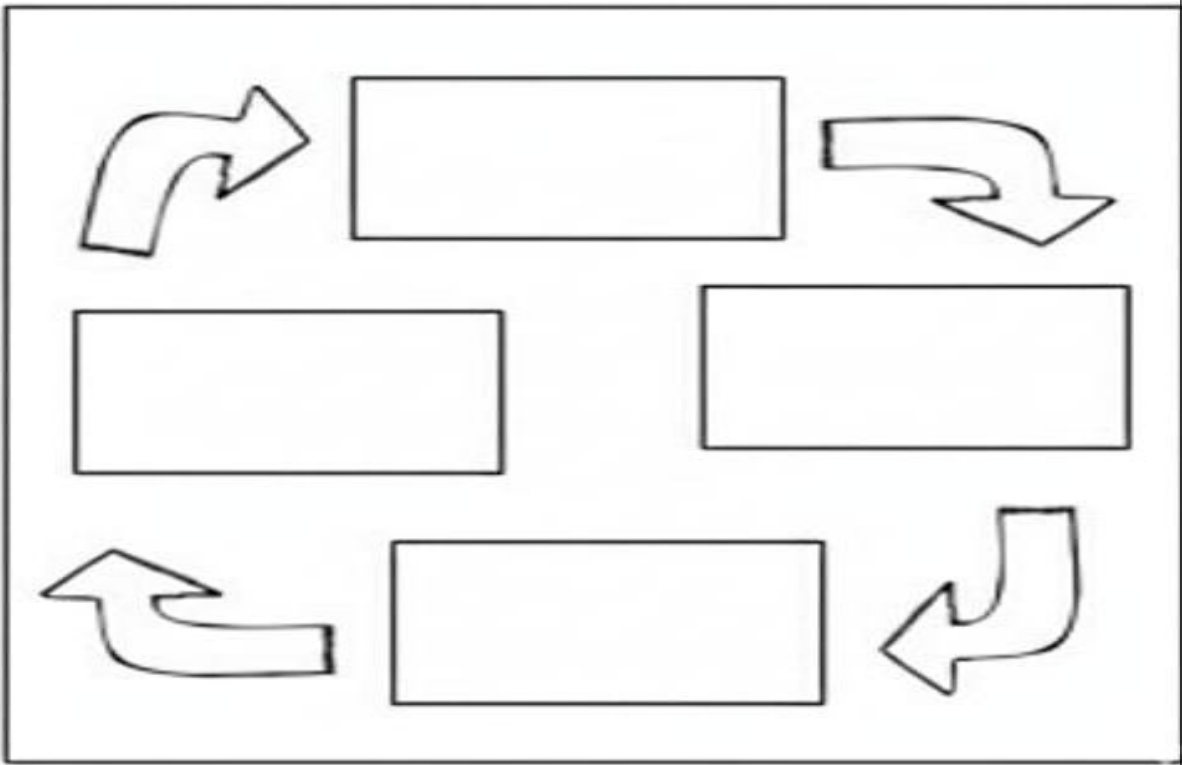
5.

The earth experiences different seasons due to its tilted axis and revolution around the sun . If the earth did not revolve around the sun with its tilted axis –

- A) What would happen to the climate change of your area ?
B) Describe the difference in seasons between the northern hemisphere and southern hemisphere.

[illegible]
$$\begin{array}{r} 2 + 2 \\ = 4 \end{array}$$

	CG.3 Explain how to ensure the safety of self and others in different situations	
12.	Which of the following is a "clean" and renewable source of energy? a) Coal b) Petrol c) Solar Energy d) Diesel	1
13.	Fill in the blanks : Shortening of days and shedding of leaves are signs of the _____ season.	1
14.	What causes day and night on the Earth? (a) Revolution of the Sun (b) Rotation of the Moon (c) Rotation of the Earth (d) Movement of stars	1
15.	The process of turning fibers into yarn by twisting them is called: a) Weaving b) Dyeing c) Spinning d) Knitting	1
16.	Why is it better to use a bicycle instead of a motorcycle for short distances? (Relate to energy and environment). _____ _____ _____ _____ _____ _____	2
	CG.4 Develops sensitivity towards social and natural environments.	
17.	Which of these is a "Kharif" crop, usually harvested at the end of the monsoon? a) Wheat b) Mustard c) Paddy (Rice) d) Gram	1
18.	Who was the first Indian astronaut to see Earth from space and describe it as "SaareJahaan Se Achcha"? a) Shubhanshu Shukla b) Rakesh Sharma c) Sunita Williams d) Kalpana Chawla	1
19.	Label the seasons in the given diagram : 	$\frac{1}{2} \times 4$ =2

20.	<p>What makes the coral reefs "rainforests of the sea"? Why are they important for fish?</p> <hr/> <hr/> <hr/> <hr/>	2
21.	<p>Draw the life cycle of a silk moth and name its four stages. Also write the primary food source for a silkworm to grow and produce silk .</p> <hr/> <div style="border: 1px solid black; padding: 10px; text-align: center;">  </div>	2+1+ 1 = 4
CG. 5 (Develops the ability to read and interpret simple maps)		
22.	<p>Which of these is a model of the Earth?</p> <p>a) Map b) Compass c) Globe d) Satellite</p>	1
23.	<p>An Bay is a piece of land surrounded by water on:</p> <p>a) One side b) Two sides c) Three sides d) All sides</p>	1
24.	<p>Locate the given points on the given map :</p> <ol style="list-style-type: none"> 1. Name of the island group located in the Arabian Sea. 2. Brother of seven sisters 3. Bay Of Bengal 4. Western Ghats 	4

INDIA

Political

